

2011 FJCL State Latin Forum Geography

N.B. Questions 1-5 pertain to ancient cities

1. Which of these ancient cities was in what we now call Spain?
a. Tarsus b. Gades c. Arelate d. Messana
2. Which of these cities was NOT in Britannia?
a. Eboracum b. Aquae Sulis c. Burdigala d. Londinium
3. Trapezus is a port city on the _____ Sea.
a. Black b. Aegean c. Ionian d. Tyrrhenian
4. Ephesus was located in an area the Romans would have called
a. Thracia b. Syria c. Cyrenica d. Asia
5. Which river actually flows through the ancient city of Athens?
a. Cephisus b. Tempe c. Eridanus d. Ilisus

N.B. Questions 6-10 pertain to ancient places and their modern equivalents

6. Which of these ancient names most closely occupies the area that is modern France?
a. Moesia b. Gallia c. Aquitania d. Mauritania
7. The European city of Cartagena was originally called
a. Carthago Nova b. Emporion c. Cartenna d. Camulodunum
8. The modern Greek island of Corfu was known as _____ in classical times
a. Cephallenia b. Zacynthus c. Leucas d. Corcyra
9. The town near the famous palace of Hadrian is now called Tivoli, in ancient times it was?
a. Tibur b. Collatia c. Treba d. Tusculum
10. The ancient town of Lutetia is now
a. London b. Paris c. Coln d. Lyon

N.B. Questions 11-15 pertain to directional geography

11. Which island is southeast of Athens?
a. Naxos b. Scyros c. Samos d. Aegina
12. Which Italian city is to the south of Rome?
a. Tarentum b. Tarquinii c. Asculum d. Mutina

13. If Aeneas had decided to sail from Carthage to Knossos, which direction would he travel?
a. West b. South c. North d. East
14. If a merchant in Syracuse wanted to sell his goods in Lugdunum, which direction would he travel?
a. Southwest b. Southeast c. Northwest d. Northeast
15. On a busy day, Hermes began in Arcadia, flew first to Acarnia, then to Boeotia and finally to Mount Ida in Mysia. Which directions would he fly and in what order?
a. Northwest - East - Northeast b. East - North - South
c. North - Northwest - Northeast d. South - East - North

N.B. Questions 16-20 pertain to provinces of the Roman Empire

16. Augustus exiled the poet Ovid to the city of Tomi on the Black Sea. In which province was Tomi located?
a. Thracia b. Dacia c. Moesia d. Dalmatica
17. Which of these provinces was the farthest west?
a. Cyrenica b. Sardinia c. Cilicia d. Mauretania
18. Which province did not border on Tarraconensis?
a. Lusitania b. Aquitania c. Baetica d. Lugdunensis
19. In the time of Trajan, Greece was divided into three provinces. Which contained the famous cities of Athens, Sparta and Corinth?
a. Epirus b. Macedonia c. Achaea d. Laconia
20. The Euphrates River served as the eastern boundary of the province of
a. Armenia b. Syria c. Tingitana d. Mesopotamia

N.B. Questions 21-30 map of the Roman Empire

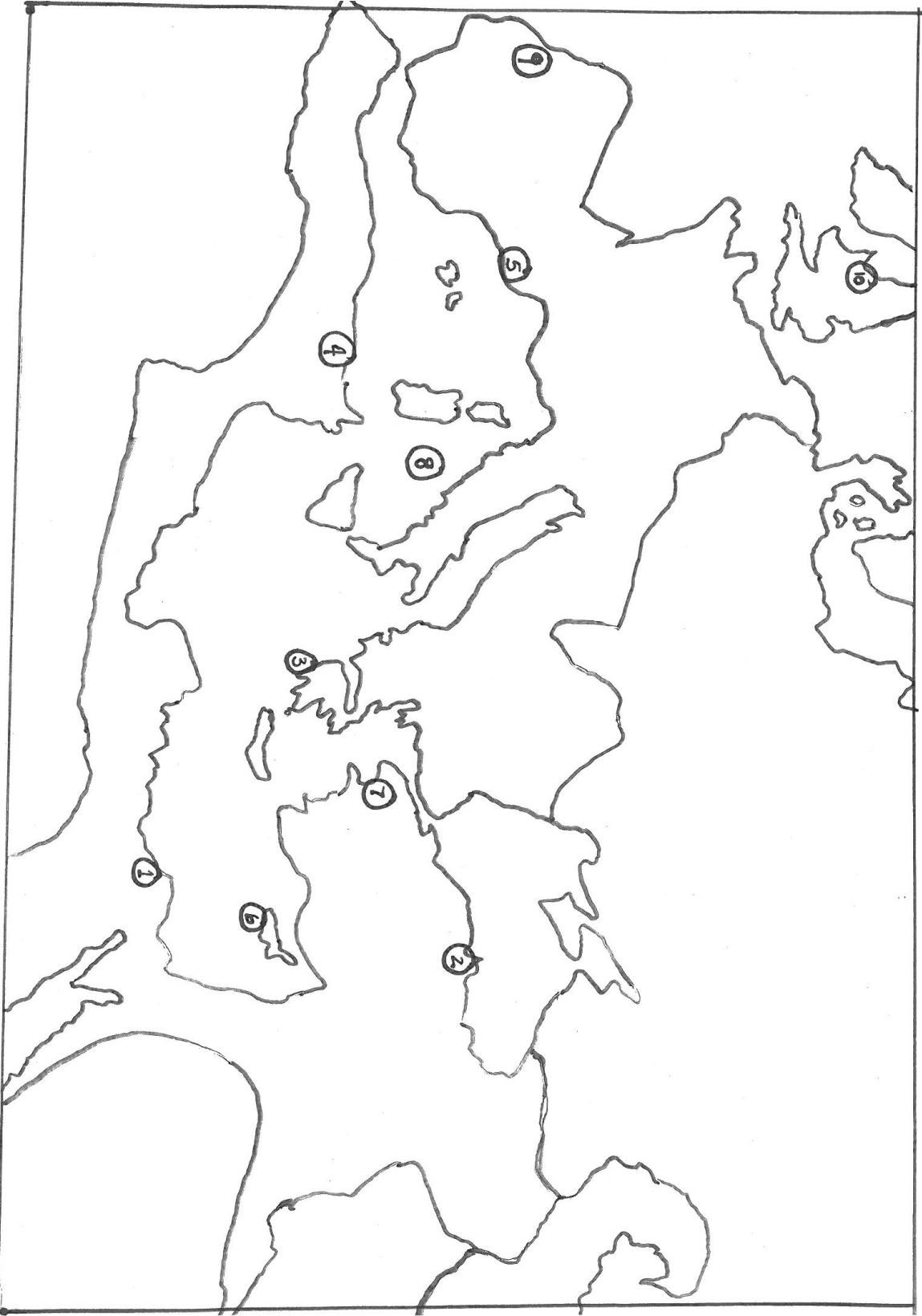
21. Number 1
a. Alexandria b. Thebes c. Gaza d. Cyrene
22. Number 2
a. Nicomedia b. Sinope c. Antioch d. Halicarnassus
23. Number 3
a. Thermopylae b. Pylos c. Apollonia d. Calydon
24. Number 4
a. Carthage b. Caesarea c. Hippo Regius d. Arsinoe
25. Number 5
a. Tarraco b. Cirta c. Colonia Agrippina d. Tingis

26. Number 6
 a. Rhodes b. Crete c. Corsica d. Cyprus
27. Number 7
 a. Carrhae b. Ancyra c. Artaxata d. Pergamum
28. Number 8
 a. Maeotis Palus b. Pontus Euxinus c. Mare Tuscum d. Icarian Sea
29. Number 9
 a. Mauretania b. Narbonensis c. Raetia d. Lusitania
30. Number 10
 a. Calleva b. Isca c. Camelodunum d. Deva

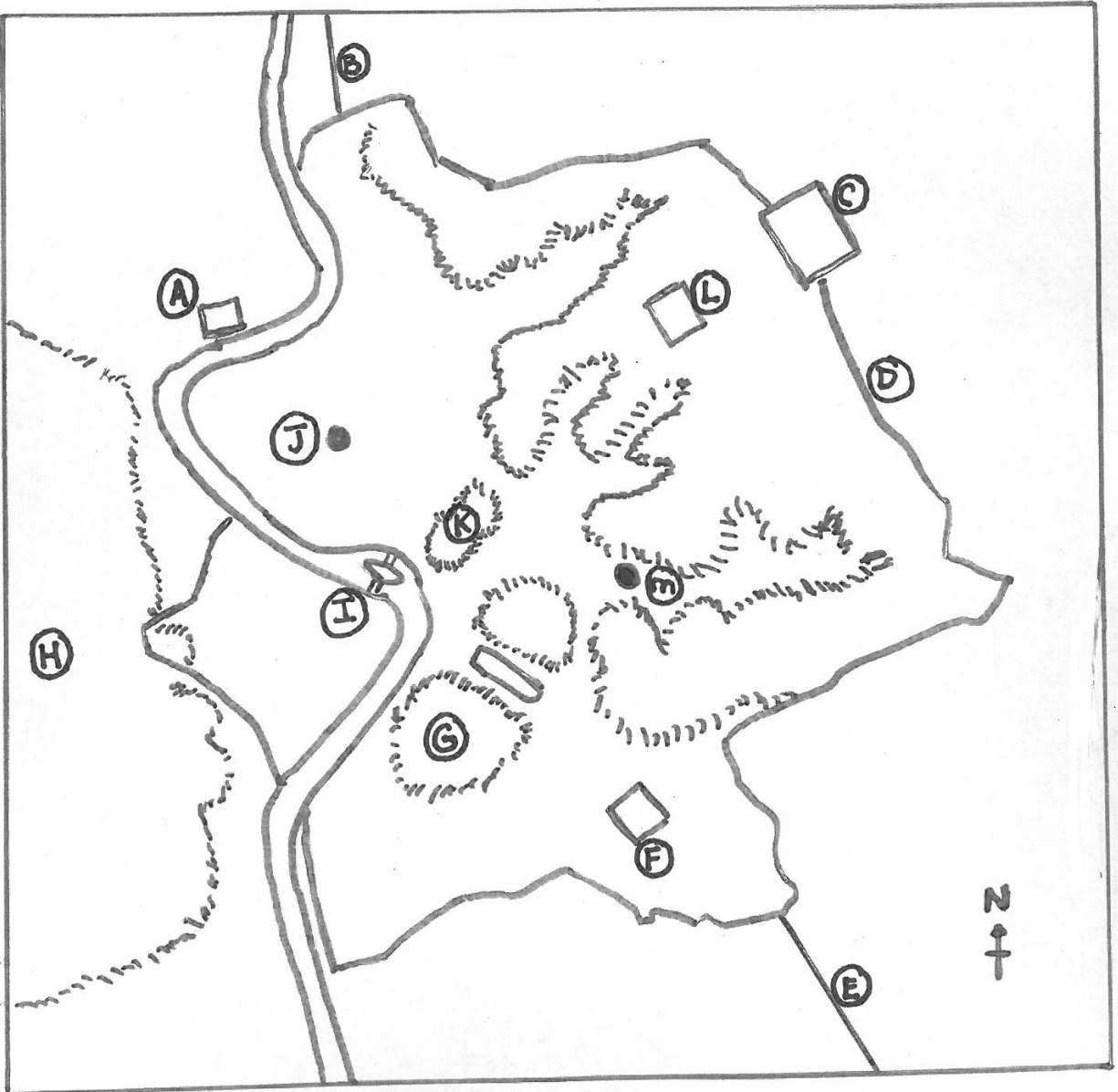
N.B. Questions 31-40 map of Rome

31. Letter A
 a. Mausoleum of Augustus b. Temple of Fortuna Virilis
 c. Mausoleum of Hadrian d. Saepta Julia
32. Letter B is the Via
 a. Salaria b. Aurelia c. Flaminia d. Asinaria
33. Letter C
 a. Baths of Trajan b. Baths of Agrippa
 c. Castra Praetoriana d. Castrensian Amphitheatre
34. The walls at letter D were begun by
 a. Servius Tullius b. Aurelian c. Oppian d. Alexander Severus
35. Letter E is the Via
 a. Latina b. Appia c. Ostiensis d. Portuensis
36. Letter F marks the Baths of
 a. Caracalla b. Trajan c. Diocletian d. Nero
37. Letter G is the _____ Hill
 a. Palatine b. Aventine c. Caelian d. Esquiline
38. Letter H is the _____ Hill
 a. Viminal b. Oppian c. Quirinal d. Janiculum
39. The two bridges to the right of letter I are
 a. Cestian and Fabrician b. Fabrician and Sublician
 c. Sublician and Aurelian d. Aurelian and Aemilian

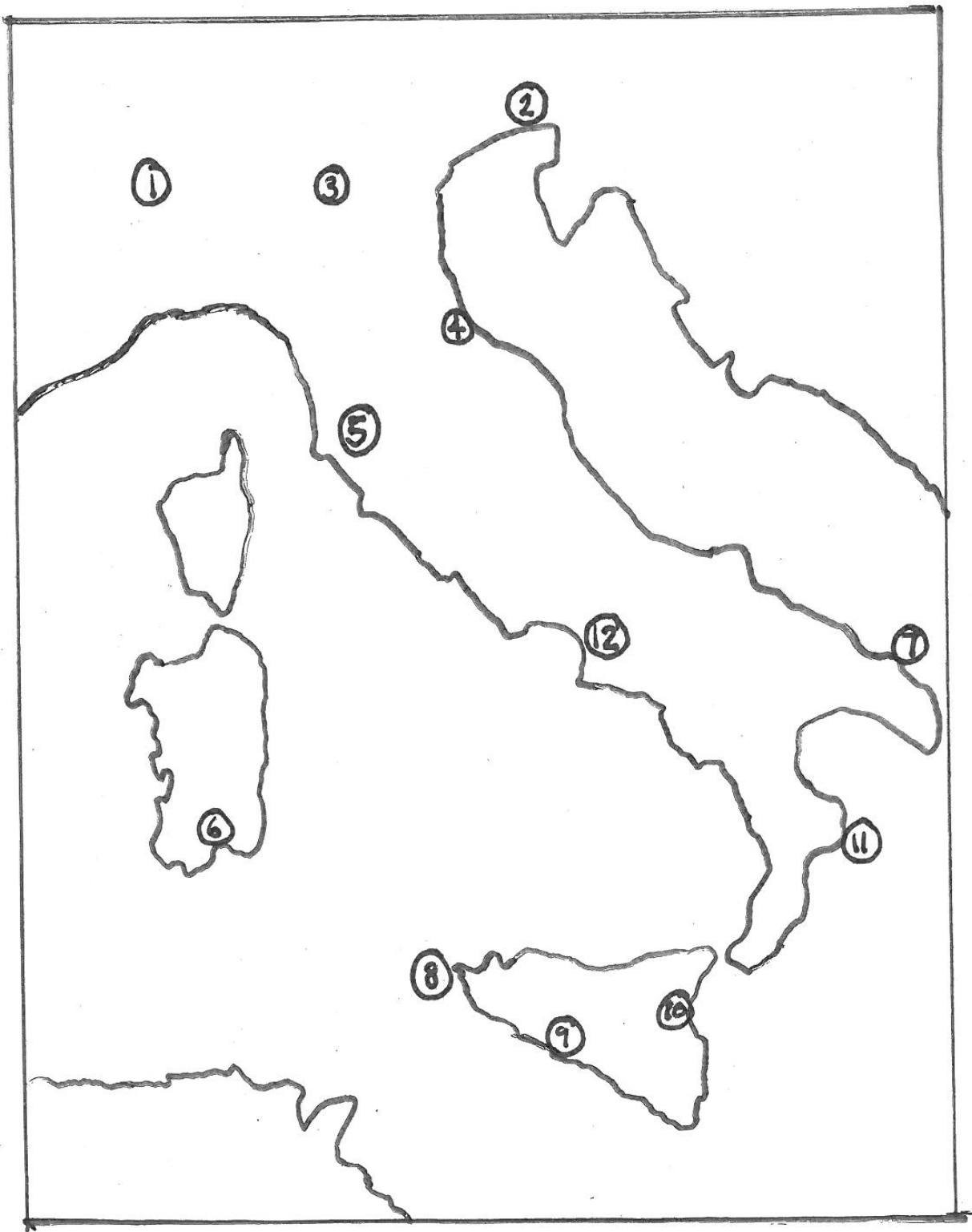
Map of the Mediterranean



Map of Rome



Map of Italy, Sicily, Corica, & Sardinia



Extra questions

1. Mediolanum is the modern city of
 - a. Manchester
 - b. Marseilles
 - c. Milan
 - d. Mantua
2. Nemausus is a city in modern
 - a. Germany
 - b. Spain
 - c. Belgium
 - d. France
3. (On map of Rome) Letter J
 - a. Pantheon
 - b. Colosseum
 - c. Ara Martis
 - d. Circus Flaminius
4. (On map of Rome) Letter L
 - a. Baths of Caracalla
 - b. Baths of Trajan
 - c. Baths of Diocletian
 - d. Baths of Nero
5. (On map of Italy) Number 10 is
 - a. Mount Aetna.
 - b. Mount Vesuvius.
 - c. Henna.
 - d. Rhegium.
6. (On map of Italy), Number 12 is the region of Italy known as
 - a. Lucania.
 - b. Campania.
 - c. Samnium.
 - d. Calabria.