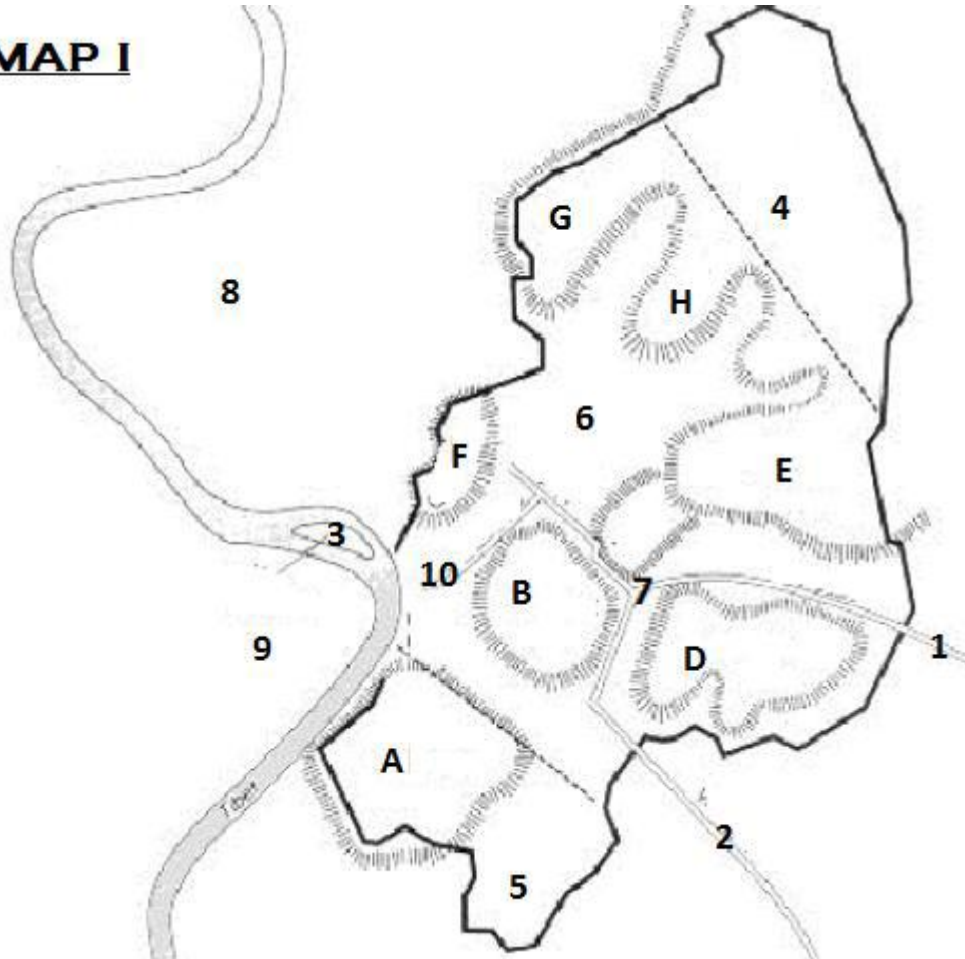


**REGIONAL LATIN FORUM 2012**  
**GEOGRAPHY**

1. The modern name of Colonia Agrippina is  
a. Cartagena      b. Cadiz      c. Cologne      d. Colchester
2. The ancient name of Bodrum is  
a. Carrhae      b. Halicarnassus      c. Thapsus      d. Smyrna
3. On which hill were the Baths of Trajan built?  
a. Oppian      b. Janiculum      c. Aventine      d. Viminal
4. The Euphrates River was located in which province?  
a. Judaea      b. Galatia      c. Mesopotamia      d. Pontus
5. If you are entering the east side of the Forum under which arch are you passing?  
a. Arch of Constantine      b. Arch of Augustus      c. Arch of Severus      d. Arch of Titus
6. Mt. Cithaeron is located in which Greek region?  
a. Boeotia      b. Arcadia      c. the Argolid      d. Thessaly
7. Which of the following rivers is NOT found in Europe?  
a. Danuvius      b. Tigris      c. Hiberus      d. Rhenus
8. Which Roman province is located on the southeastern coast of the Black sea?  
a. Moesia      b. Lycia      c. Cilicia      d. Bithynia
9. The modern day city of Aelia Capitolina is in what modern country?  
a. Israel      b. Turkey      c. France      d. Egypt
10. Which of the following was the closest to the Nilus River?  
a. Corcyra      b. Sicily      c. Cyprus      d. Rhodes
11. Which mountains are the Pillars of Hercules nearest to?  
a. Atlas      b. Alps      c. Caucasus      d. Pyrennes
12. Which city was located on the Danuvius River?  
a. Deva      b. Aquincum      c. Nicomedia      d. Tomi
13. Which of the following seas do NOT border the Greek mainland?  
a. Mediterranean Sea      b. Aegean Sea      c. Ionian Sea      d. Caspian Sea
14. Which of the following provinces are closest to each other in proximity?  
a. Gallia and Brittania      b. Brittania and Aegyptus  
c. Aegyptus and Syria      d. Syria and Dalmatia
15. This ancient city is the capital of present day Libya:  
a. Cirta      b. Thapsus      c. Oea      d. Hadrumentum
16. The French city of Nimes was known to the Romans as  
a. Nicaea      b. Mediolanum      c. Massilia      d. Nemausus

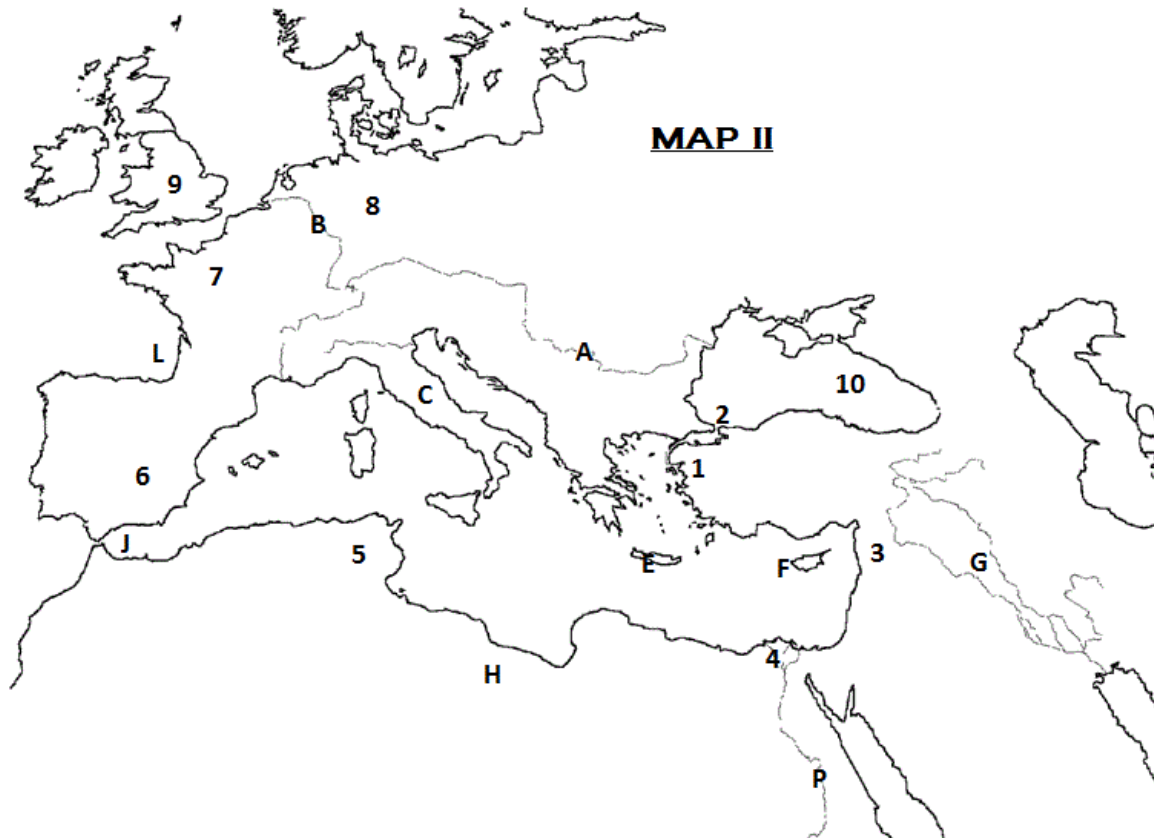
17. Which Italian city is closest to Rome?  
 a. Clusium      b. Ostia      c. Antium      d. Formiae
18. You are standing in front of the building dedicated by Eumachia in the Forum in Pompeii. Which building is directly across from you?  
 a. The Basilica      b. Temple of Juppiter      c. Temple of Apollo      d. Macellum
19. If you sail due east from Massilia, where is the first place you will reach?  
 a. Rome      b. Naples      c. Corsica      d. Etruria
20. Leptis Magna, the birthplace of Septimius Severus is  
 a. south of Alexandria      b. west of Carthage      c. north of Leptis Minor      d. east of Oea
21. Tomi is \_\_\_\_\_ of Rome.  
 a. northwest      b. southwest      c. northeast      d. south
22. Which wall is NOT in Italy?  
 a. Servian Wall      b. Hadrian's Wall      c. Aurelian Wall      d. Wall of Romulus
23. \_\_\_\_\_ is a small island off the coast of southern Italy.  
 a. Capri      b. Elba      c. Aegina      d. Pantelleria
24. This strait connects the Aegean Sea and the Sea of Marmara.  
 a. Strait of Gibraltar      b. Strait of Messina      c. Hellespont      d. Bosphorus
25. Which was a city in Germany?  
 a. Corfinium      b. Aquae Sextiae      c. Camulodunum      d. Augusta Treverorum
26. If you are on the Aventine hill, to which Roman gate would you be nearest?  
 a. Porta Ostiensis      b. Porta Flaminia      c. Porta Salaria      d. Porta Tiburtina
27. Which island is located farthest north?  
 a. Chios      b. Samos      c. Lemnos      d. Ios
28. Which of these cities are NOT in modern Turkey?  
 a. Carrhae      b. Tyrus      c. Gordion      d. Troy
29. What did the Romans call Scotland?  
 a. Baetica      b. Pannonia      c. Hibernia      d. Caledonia
30. Which region of Greece is south of Athens?  
 a. Arcadia      b. Boeotia      c. Thessaly      d. Epirus

**MAP I**



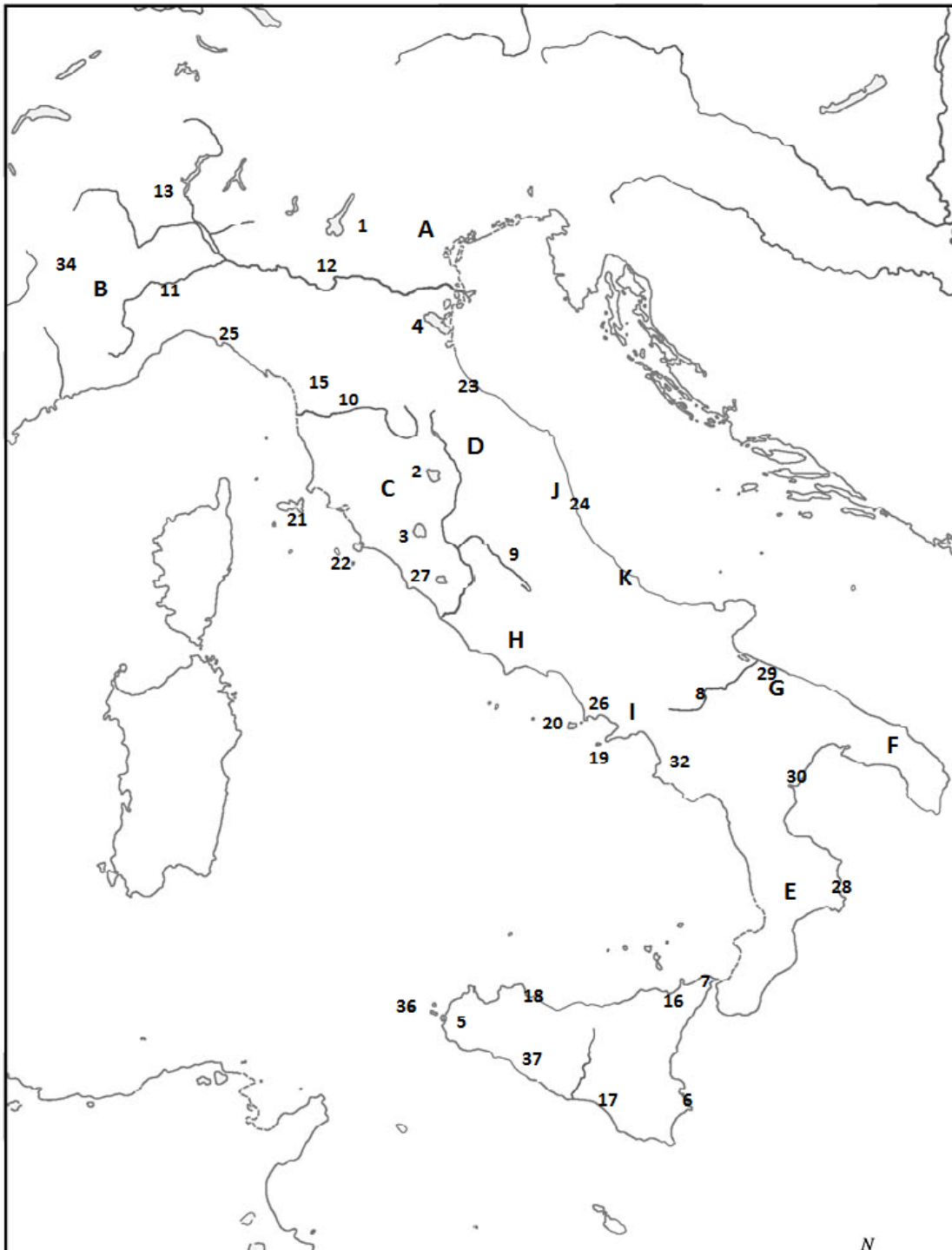
**For questions 31-36 use Map I (above):**

31. Letter D marks the location of the \_\_\_\_\_ hill.  
 a. Viminal      b. Quirinal      c. Caelian      d. Aventine
32. The Campus Martius is found at number  
 a. nine      b. eight      c. ten      d. two
33. Number 2 marks the location of  
 a. Via Asinaria      b. Via Appia      c. Via Claudia      d. Via Aemilia
34. The Flavian Amphitheater was located at number  
 a. nine      b. five      c. seven      d. six
35. Number 3 marks the location of the  
 a. Ara Pacis      b. Forum Augusti      c. Forum Boarium      d. Insula Tiberina
36. Which letter marks the location of the Esquiline Hill?  
 a. D      b. E      c. G      d. H



**For questions 37-42 use Map II (above):**

37. Letter A marks the \_\_\_\_\_ river.  
 a. Danuvius    b. Hiberus    c. Rhodanus    d. Rhenus
38. Number 6 marks the province of \_\_\_\_\_.  
 a. Thracia    b. Dacia    c. Hispania    d. Lusitania
39. Letter E marks the island of \_\_\_\_\_.  
 a. Crete    b. Cyprus    c. Euboea    d. Rhodes
40. The city of Byzantium is found at number  
 a. one    b. two    c. three    d. four
41. Which city can NOT be found in Number 9?  
 a. Aquae Sulis    b. Eboracum    c. Glevum    d. Lugdunum
42. Identify Number 10.  
 a. Sinus Saronicus    b. Pontus Euxinus    c. Mare Myrtoum    d. Syrtis Maior



**For questions 43-50 use Map III (above):**

43. Number 36 marks the location of which island(s)?  
 a. Aegates      b. Lipara      c. Aenaria      d. Planasia
44. Paestum can be found at number  
 a. twenty-eight      b. twenty-four      c. twenty-five      d. thirty-two

45. Identify the city found at number 17.  
a. Syracuse      b. Agrigentum      c. Messana      d. Gela
46. Tarentum is located in the region marked  
a. E      b. F      c. G      d. I
47. Mylae is located at number  
a. five      b. eleven      c. sixteen      d. twenty-nine
48. Which of these is NOT located in the area depicted on Map 3?  
a. Balearic Islands      b. Apennine Mountains      c. Lake Trasimene      d. Metaurus River
49. Who lived in the area marked letter C?  
a. Paeligni      b. Galli      c. Marsi      d. Etrusci
50. What city is found at number 4?  
a. Patavium      b. Ravenna      c. Mediolanum      d. Mantua