

**FJCL REGIONAL LATIN FORUM 2015  
GEOGRAPHY**

**For questions 1-10, refer to Map #1 – Italy.**

1. Which island is marked by the letter A?  
a. Sicily                      b. Sardinia                      c. Crete                      d. Cyprus
2. Identify the city the Romans called Paestum.  
a. 3                      b. 13                      c. 12                      d. 17
3. Which city is closest to Lake Trasimene?  
a. 16                      b. 3                      c. 5                      d. 4
4. In what region would you find the Rubicon?  
a. E                      b. D                      c. K                      d. P
5. Identify the city found at number 14.  
a. Brundisium                      b. Cannae                      c. Messana                      d. Capua
6. Syracuse, marked by number \_\_\_\_\_, is on Sicily, marked by letter \_\_\_\_\_.  
a. 19, Q                      b. 20, Q                      c. 21, Q                      d. 22, Q
7. Who lived in the area marked K?  
a. Umbrians                      b. Samnites                      c. Etruscans                      d. Latins
8. Identify the region marked by the letter F.  
a. Umbria                      b. Etruria                      c. Latium                      d. Calabria
9. What city is marked by 7.  
a. Formiae                      b. Rhegium                      c. Ostia                      d. Veii
10. What city and region are marked by the 13, M?  
a. Cannae, Apulia                      b. Neapolis, Campania  
c. Rhegium, Bruttium                      d. Veii, Etruria

**For questions 11-19, refer to Map #2 – City of Rome.**

11. Which letter marks the Naumachia Augusti?  
a. r                      b. m                      c. r                      d. d
12. Which of the following is on the Caelian hill?  
a. Templum Divi Claudii                      b. Templum Concordiae  
c. Templum Castorum                      d. Templum Divi Romuli

13. The Via Flaminia, marked by the letter \_\_\_\_, connects Rome to \_\_\_\_\_.  
 a. A, Ravenna      b. B, Arminum      c. C, Praeneste      d. D, Neapolis
14. Which letter marks the Via Appia, which was where many wealthy families had their tombs?  
 a. C                      b. D                      c. E                      d. F
15. At which site was the Domus Aurea, where Nero held lavish dinner parties?  
 a. r                      b. s                      c. t                      d. u
16. The Mausoleum Augusti is pointed to by the letter \_\_\_\_\_.  
 a. c                      b. d                      c. f                      d. g
17. The \_\_\_\_\_ hill, is the hill furthest to the west.  
 a. Palatine              b. Janiculum              c. Viminal              d. Esquiline
18. The Baths of \_\_\_\_\_ (letter W) were between the \_\_\_\_\_ & \_\_\_\_\_ hills.  
 a. Caracalla, Aventine, Caelian              b. Diocletian, Juniculum, Caelian  
 c. Trajan, Aventine, Palatine              d. None of the above
19. Which letter marks the Pantheon?  
 a. I                      b. t                      c. j                      d. g

**For questions 20-31, refer to Map #3 – The Roman Empire.**

20. Which number represents Ephesus?  
 a. 37                      b. 38                      c. 39                      d. 35
21. What province is labelled D?  
 a. Aquitania              b. Transalpine Gaul              c. Cisalpine Gaul              d. Narbonensis
22. Which province(s) sits on the southern coast of the Black Sea.  
 a. Lugdunensis and Belgica                      b. Bithynia and Pontus  
 c. Macedonia and Thrace                      d. Lusitania and Baetica
23. Which letter marks the province the Romans called Dalmatia?  
 a. M                      b. L                      c. O                      d. K
24. What letter marks the island of Sicily?  
 a. A                      b. E                      c. Y                      d. Z
25. Which number represents the city Lutetia?  
 a. 4                      b. 5                      c. 6                      d. 7
26. Leptis Magna is in the province marked with which letter?  
 a. V                      b. W                      c. U                      d. X

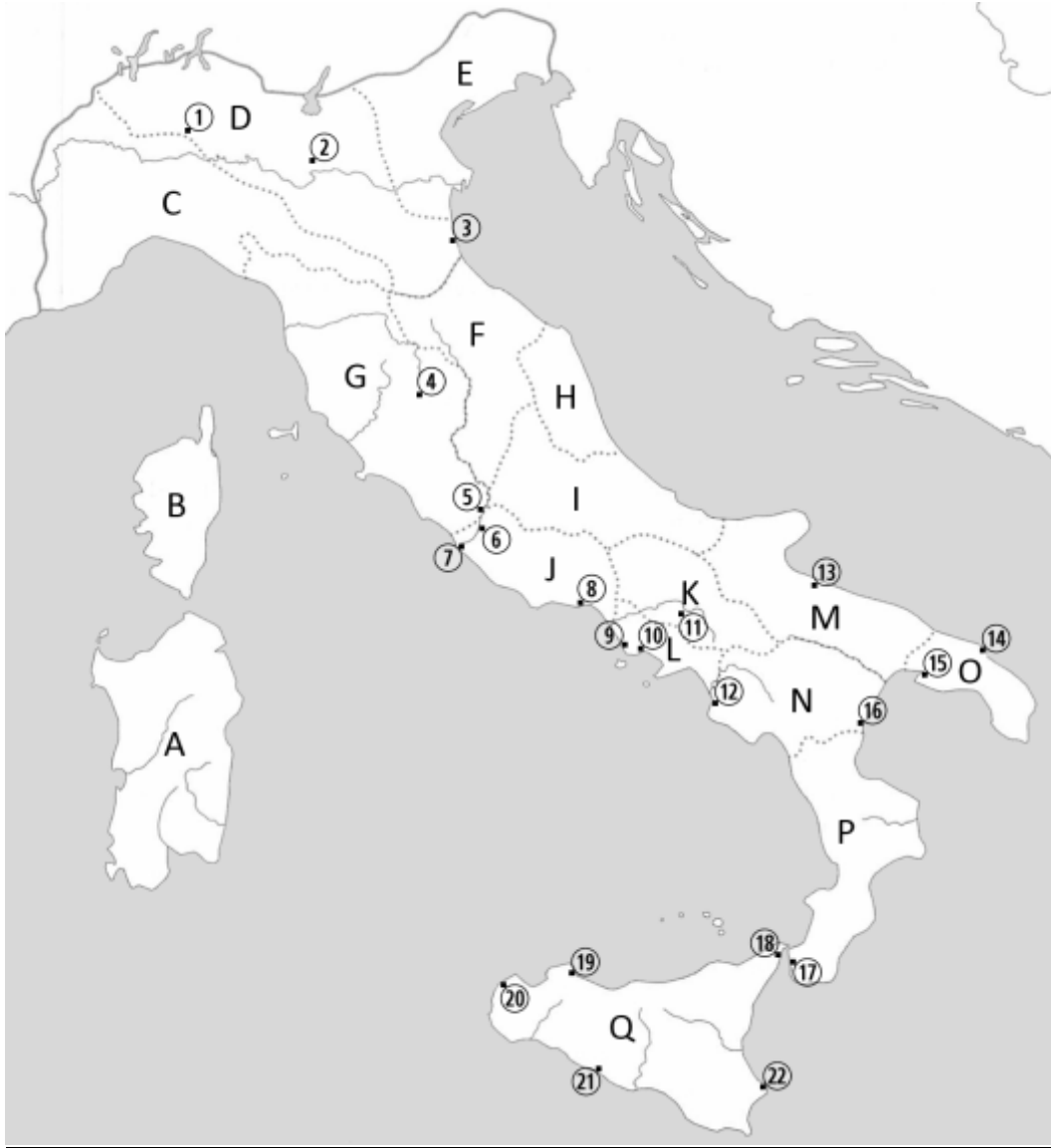
27. What is the name of the province marked with the letter S.  
 a. Mesopotamia    b. Judea    c. Arabia Petraea    d. Syria
28. The pyrenees separate the provinces of \_\_\_\_\_ and \_\_\_\_\_ marked by the letters \_\_\_\_\_ & \_\_\_\_\_.  
 a. Thracia, Asia, N, P    b. Aegyptus, Judea, U, T  
 c. Hibernia, Britannia, A, I    d. Hispania, Aquitania, E, D
29. Which island is Mt. Ida found on?  
 a. Crete    b. Corsica    c. Sardinia    d. Sicily
30. The river \_\_\_\_\_ runs between B and H.  
 a. Sequanna    b. Rhenus    c. Rhodanus    d. Hiberus
31. What city marked by the number 43 was ruled by the Ptolemies.  
 a. Tyrus    b. Thessaly    c. Alexandria    d. Eboracum

**The following questions do not refer to any maps 32-50.**

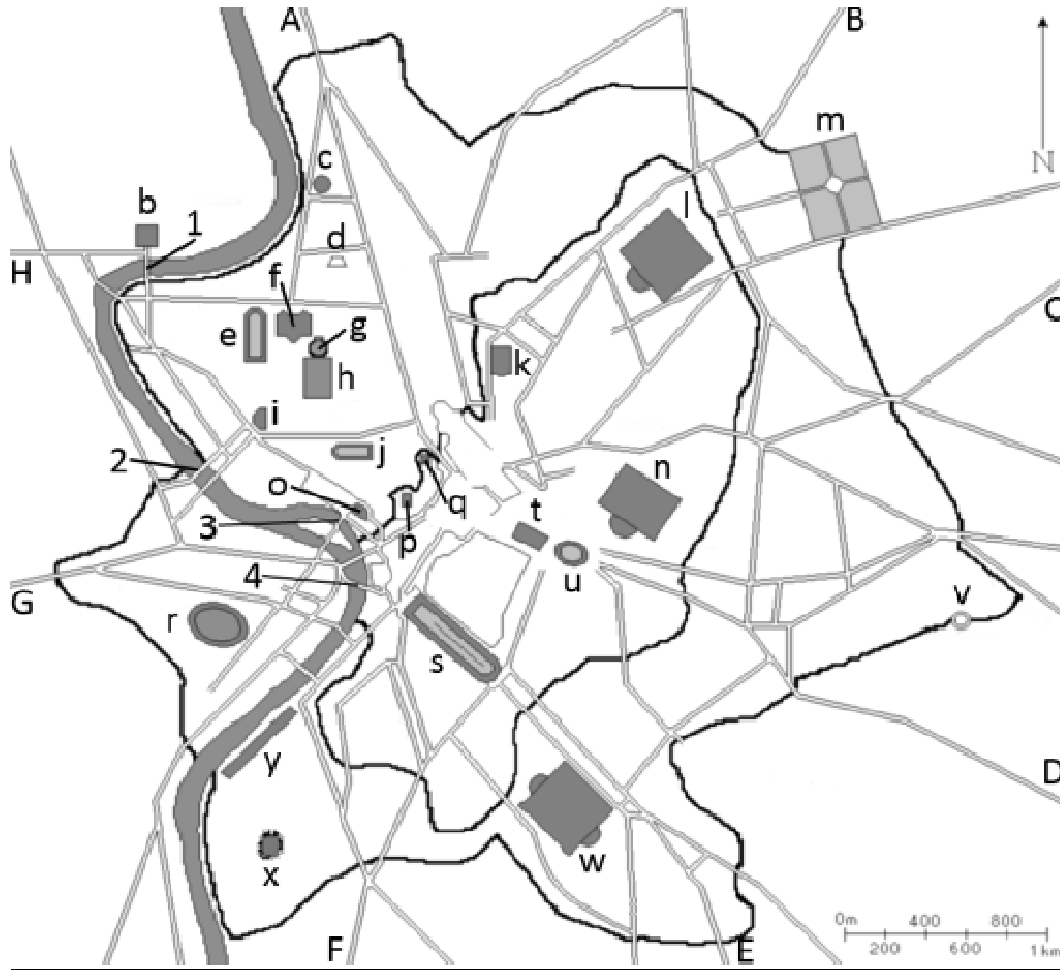
32. What was the southernmost Roman province?  
 a. Illyricum    b. Macedonia    c. Aegyptus    d. Britannia
33. The modern name of Aelia Capitolina is \_\_\_\_\_  
 a. Jerusalem    b. Colchester    c. Tripoli    d. Petra
34. Mt. Parnassus is found in which province?  
 a. Macedonia    b. Achaia    c. Epirus    d. Noricum
35. What did the Romans call Propontis?  
 a. Sea of Marmorab. Pillars of Hercules    c. Adriatic    d. Aegean Sea
36. If you sailed from Carthago Nova to Carthago you would be heading in what general direction?  
 a. West    b. East    c. North    d. South
37. Which of the following places is located the farthest east?  
 a. Africa    b. Gallia Cisalpina    c. Colchis    d. Dacia
38. If you were to travel from Aquae Sulis to Londinium what direction would you be travelling?  
 a. North    b. South    c. West    d. East
39. The ancient cities of Halicarnassus, Smyrna and Byzantium are all in modern day \_\_\_\_\_.  
 a. Turkey    b. Jordan    c. Syria    d. Lebanon

40. Which of the following cities is on the Peloponnesus?  
 a. Caesarea      b. Nicaea      c. Thessalonica      d. Corinth
41. Modern Germany is home to \_\_\_\_\_.  
 a. Augusta Treverorum      b. Emerita Augusta  
 c. Massilia      d. Glevum
42. Eburacum and Colonia Camulodunum are both found in modern \_\_\_\_\_.  
 a. Germany      b. France      c. Britain      d. Austria
43. If you were to sail from Tyrus to Carthago you would pass which of these provinces?  
 a. Hibernia      b. Aegyptus      c. Dacia      d. Syria
44. The modern name of Caledonia is \_\_\_\_\_.  
 a. Turkey      b. Scotland      c. Ireland      d. Iran
45. The ancient name of Cartagena is \_\_\_\_\_.  
 a. Carrhae      b. Corcyra      c. Colonia Agrippina      d. Carthago Nova
46. Which islands are part of the Cyclades?  
 a. Crete, Corsica      b. Samos, Chios, Lesbos  
 c. Syros, Delos, Naxos      d. Cnidos, Rhodes
47. Which island is the furthest east?  
 a. Rhodes      b. Crete      c. Thera      d. Naxos
48. Which island is the largest?  
 a. Paros      b. Samos      c. Delos      d. Chios
49. If you travelled due west from Ephesus you would end up in \_\_\_\_\_.  
 a. Epirus      b. Athens      c. Thessalonica      d. Pergamum
50. Ovid was exiled to Tomi, which is modern day \_\_\_\_\_.  
 a. Constanta, Romania      b. Izmir, Turkey  
 c. Verona, Italy      d. Paris, France

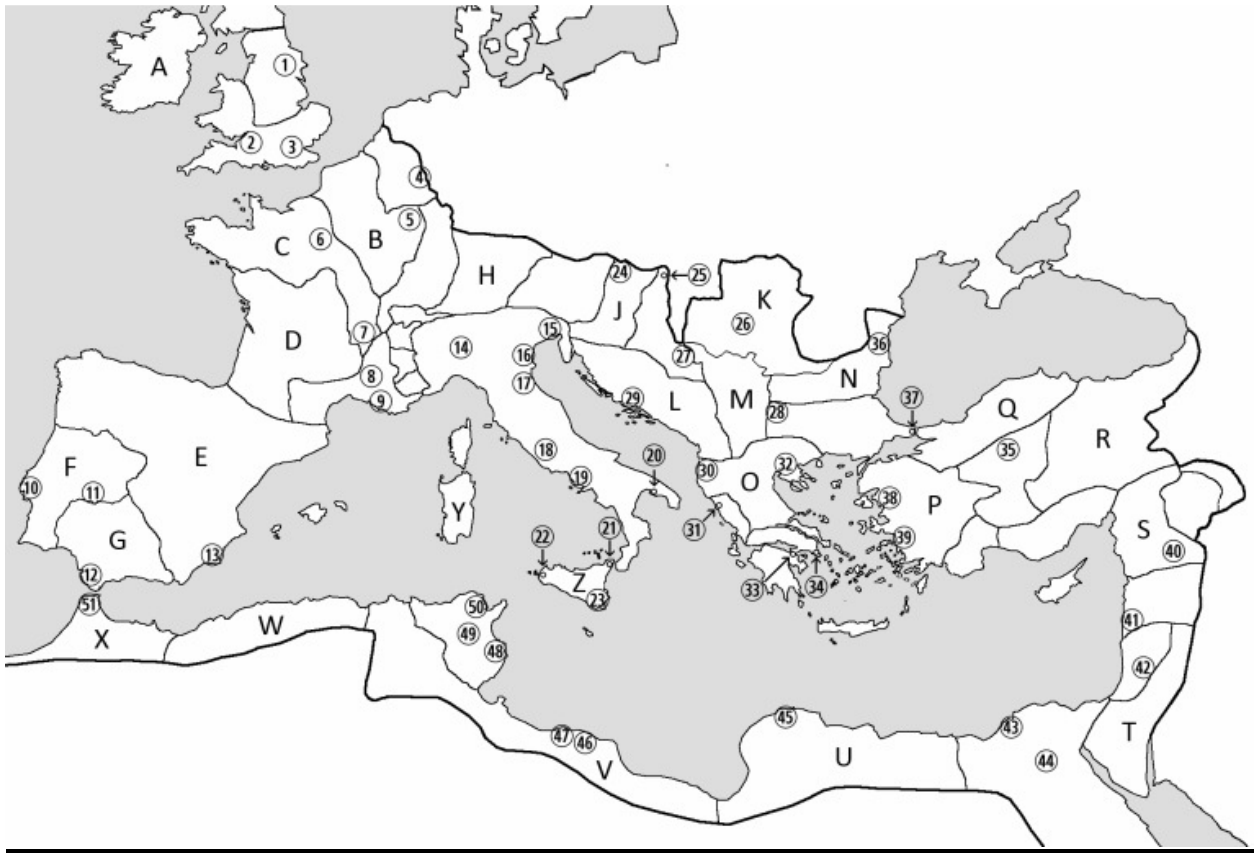
**Map #1 - Italy**



**Map #2 – City of Rome**



**Map #3 – The Roman Empire**



THIS PAGE LEFT BLANK